













# Multiplication Array Practice



Name \_\_\_\_\_ Date \_\_\_\_\_













**Multiplication Practice**  
Write a number sentence for each array.

1. 	2. 	3. 
4. 	5. 	6. 
7. 	8. 	9. 
10. 	11. 	12. 

©2016 All About Elementary

Name \_\_\_\_\_ Date \_\_\_\_\_

**Multiplication Practice**  
Write a number sentence for each array.

1. 	2. 	3. 
4. 	5. 	6. 
7. 	8. 	9. 
10. 	11. 	12. 





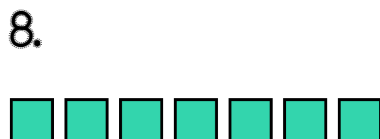





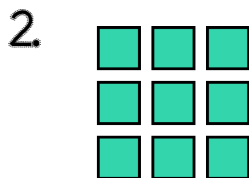

©2016 All About Elementary

**All About  
Elementary**

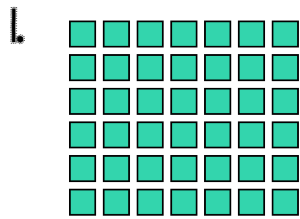
Name \_\_\_\_\_ Date \_\_\_\_\_

## Multiplication Practice

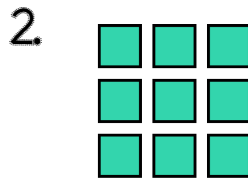
Write a number sentence for each array.




# Answer Key




$$6 \times 7 = 42$$




$$3 \times 3 = 9$$




$$7 \times 8 = 56$$




$$4 \times 5 = 20$$



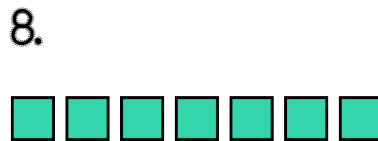
$$6 \times 8 = 48$$




$$5 \times 10 = 50$$




$$3 \times 6 = 18$$




$$1 \times 7 = 7$$




$$8 \times 9 = 72$$



$$3 \times 7 = 21$$



$$3 \times 5 = 15$$




$$4 \times 9 = 36$$

Name \_\_\_\_\_ Date \_\_\_\_\_


# Multiplication Practice

Write a number sentence for each array.


1.




2.




3.




4.




5.




6.




7.




8.




9.




10.



11.




12.




# Answer Key

1.




$$2 \times 3 = 6$$

2.




$$5 \times 6 = 30$$

3.



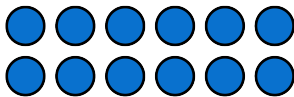
$$3 \times 8 = 24$$

4.




$$7 \times 8 = 56$$

5.




$$2 \times 6 = 12$$

6.




$$6 \times 9 = 54$$

7.




$$7 \times 3 = 21$$

8.




$$4 \times 5 = 20$$

9.




$$6 \times 7 = 42$$

10.




$$4 \times 9 = 36$$

11.



$$3 \times 3 = 9$$

12.



$$8 \times 8 = 64$$

Thank you for your purchase! Please follow my store to learn about sales and new products Copyright © 2016 All About Elementary. All rights reserved by author. Permission to copy for single classroom use only. Electronic distribution limited to single classroom only. Not for public display. Credits:



Borders are from Julie Faulkner  
<http://www.teacherspayteachers.com/Store/Julie-Faulkner>

